

# Procenty i ułamki – karta pracy

1. Zamień % na ułamki i odwrotnie.

$$8\% = \frac{8}{100} = 0,08$$

$$25\% = \dots\dots\dots = 0,25$$

$$10\% = \frac{10}{100} = \dots\dots\dots$$

$$12\% = \dots\dots\dots = 0,12$$

$$6\% = \dots\dots\dots = 0,06$$

$$33\% = \frac{33}{100} = \dots\dots\dots$$

$$75\% = \frac{3}{4} = \dots\dots\dots$$

$$99\% = \dots\dots\dots = 0,99$$

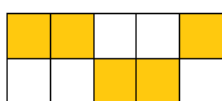
$$120\% = \dots\dots\dots 1,2$$

$$\dots\dots\dots\% = \dots\dots\dots = 0,8$$

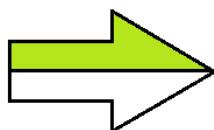
$$\dots\dots\dots\% = \frac{66}{100} = \dots\dots\dots$$

$$\dots\dots\dots\% = \dots\dots\dots = 1,45$$

2. Jaki to procent?



.....%



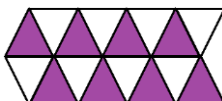
.....%

Co drugi


.....%

Trzy czwarte

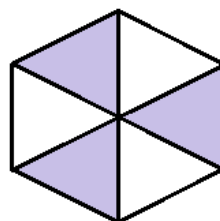
.....%



.....%



.....%



.....%

Półtora

.....%

Co piąty

.....%



.....%

3. Jaka to liczba?

$$10\% \text{ z } 50 = 5$$

$$1\% \text{ z } 50 = 0,5$$

$$20\% \text{ z } 50 = \dots\dots\dots$$

$$30\% \text{ z } 50 = \dots\dots\dots$$

$$10\% \text{ z } 30 = \dots\dots\dots$$

$$20\% \text{ z } 30 = \dots\dots\dots$$

$$1\% \text{ z } 30 = \dots\dots\dots$$

$$10\% \text{ z } 30 = \dots\dots\dots$$

$$25\% \text{ z } 80 = \dots\dots\dots$$

$$30\% \text{ z } 80 = \dots\dots\dots$$

$$100\% \text{ z } 80 = \dots\dots\dots$$

$$1\% \text{ z } 80 = \dots\dots\dots$$

$$1\text{‰} \text{ z } 1000 = 1$$

$$10\text{‰} \text{ z } 1000 = 10$$

$$50\text{‰} \text{ z } 1000 = 50$$

$$1\text{‰} \text{ z } 500 = \dots\dots\dots$$

$$10\text{‰} \text{ z } 500 = \dots\dots\dots$$

$$20\text{‰} \text{ z } 500 = \dots\dots\dots$$

$$1\text{‰} \text{ z } 100 = \dots\dots\dots$$

$$5\text{‰} \text{ z } 100 = \dots\dots\dots$$

$$10\text{‰} \text{ z } 100 = \dots\dots\dots$$